



0000

High Temperatures This Week



When was the high temperature 60 degrees?

Wednesday and Thursday

Monday

Thursday and Friday

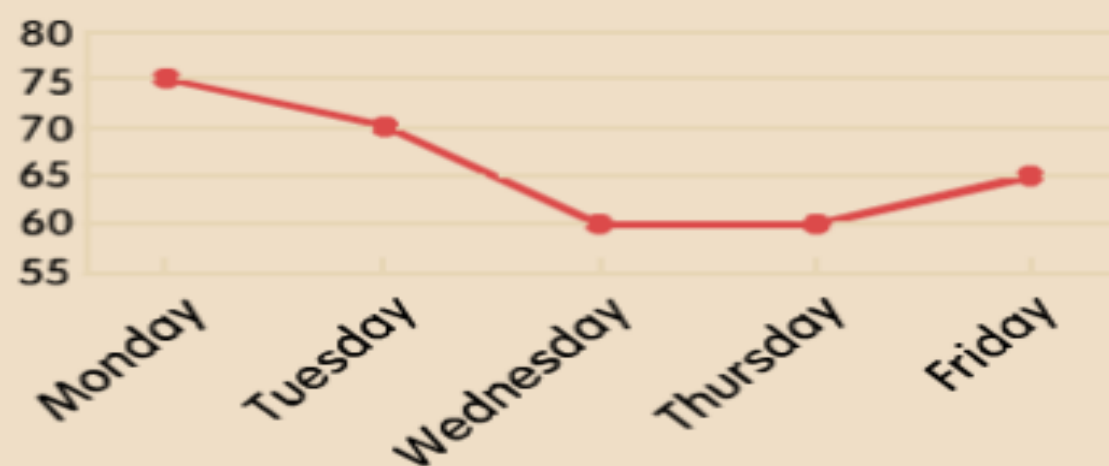
Tuesday



0008

TIME

High Temperatures This Week



What will the temperature be like next week?

Monday will be warm.

Tuesday will be 70 degrees.

You can't tell from the graph.

It will rain all week.



0016

TIME



How many days was the high temperature 65 degrees?

High Temperatures This Week



0

5

2

1





0024

TIME



High Temperatures This Week



What day was the high temperature 75 degrees?

Monday

Wednesday

Tuesday

Thursday



0048

High Temperatures This Week



When was the high temperature 60 degrees?

Monday

Wednesday and Thursday

Thursday and Friday

Tuesday

0049

Ice Cream Sales



What is true?

June had no sales.

August had the most sales.

Sales rose in July.

Sales stopped in September.



0057

TIME

Ice Cream Sales

more ↑
less ↓



What is true?

May had less than June.

June had more than September.

July had less than August.

August had more than June.

0065

What month had the most ice cream sales?

Ice Cream Sales



January

June

August

July

0073

What flavor do kids like best?

Ice Cream Sales



You can't tell from the graph.

chocolate

vanilla

May

0081

Ice Cream Sales



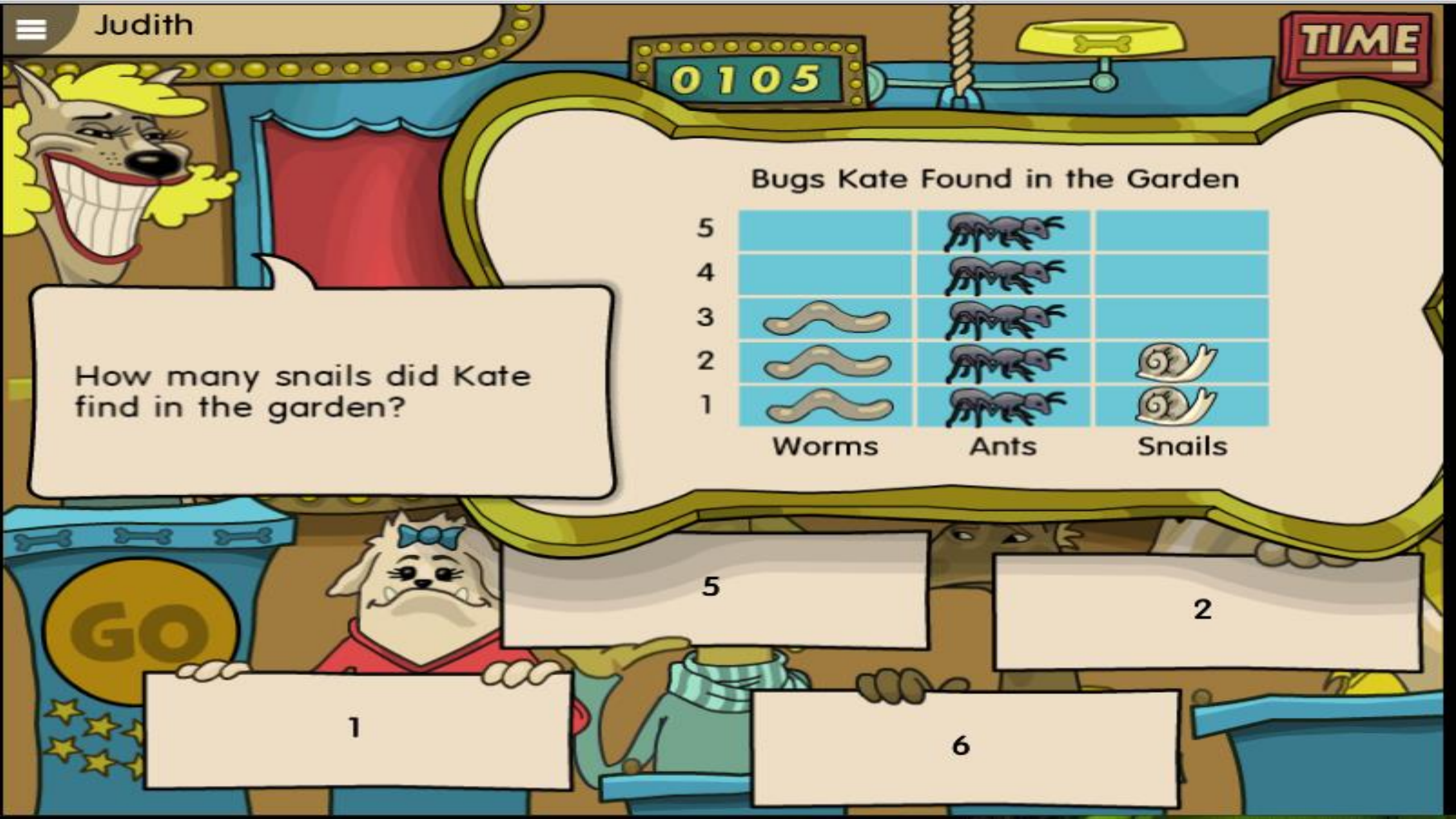
What month had the fewest ice cream sales?

July

June

August

September



Judith



0105

TIME

How many snails did Kate find in the garden?

Bugs Kate Found in the Garden

5
4
3
2
1

Worms

Ants

Snails

5

2











1

6



How many worms did Kate find in the garden?

Bugs Kate Found in the Garden

5			
4			
3			
2			
1			
	Worms	Ants	Snails

5

3











8

1





Bugs Kate Found in the Garden

5			
4			
3			
2			
1			
	Worms	Ants	Snails

The table shows that Kate found:

3 ants


less ants than worms

more ants than worms

more snails than worms



Color of Eyes Among Students



What is true about the color of eyes among students?

more green eyes than blue

more brown eyes than green

less brown eyes than green

more blue eyes than green



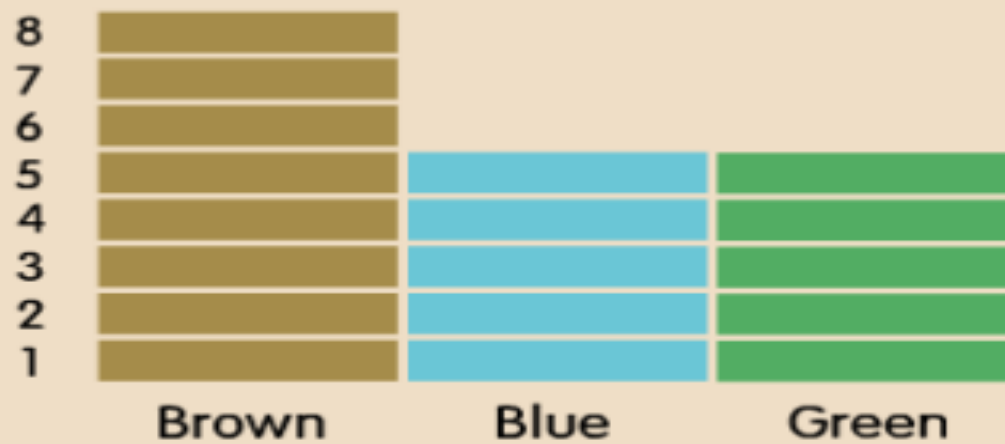
0137

TIME



How many students have
blue or green eyes?

Color of Eyes Among Students



1

10

8

5

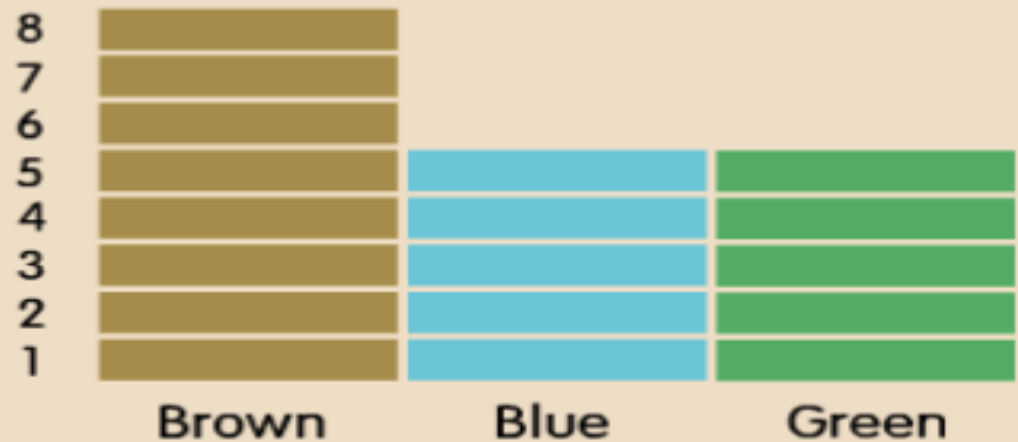




0145

TIME

Color of Eyes Among Students



How many students have blue eyes?

1

8

3

5

0169

Number of Books Read

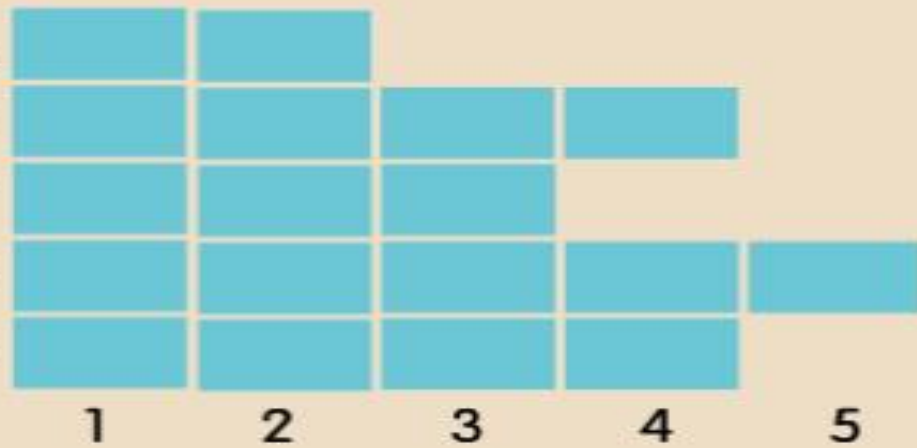
Mason

Lily

Tyler

Ella

Zoe



Who has read the fewest books?

Ella

Tyler

Mason

Zoe

0177

Mason

Lily

Tyler

Ella

Zoe

Who has read exactly 3 books?

1

2

3

4

5

Ella

Zoe

Tyler


Mason



0185

TIME

Number of Books Read



Who has read the most books?

Zoe

Ella

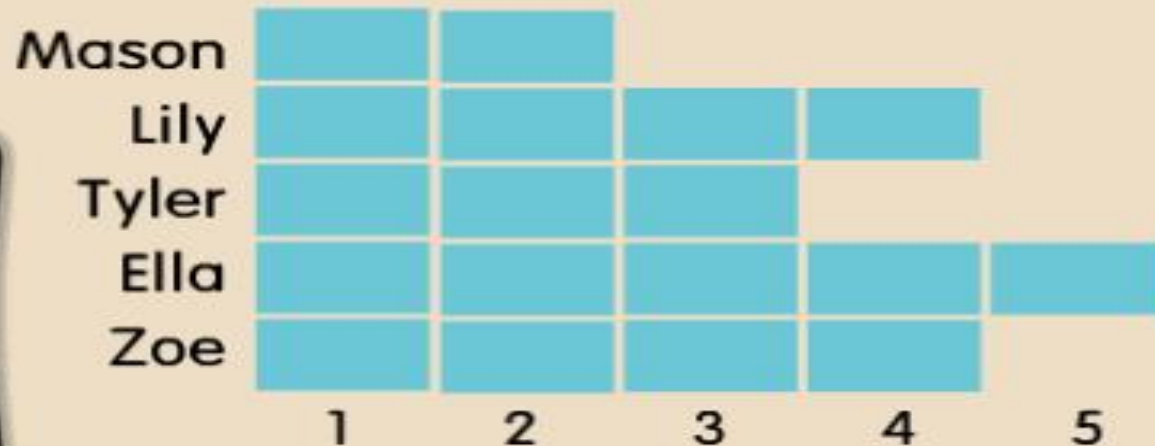
Mason

Lily



0193

Number of Books Read



Who has read at least 4 books?

Tyler, Mason, and Zoe

Lily and Tyler

Lily, Ella, and Zoe

Mason



0201

Pages Read This Week

Tori	Sam	Brian	Sara
10	30	8	42

Who read the fewest pages?

Brian

Sam

Tori

Sara



0202

TIME

Pages Read This Week

Tori	Sam	Brian	Sara
10	30	8	42

Who read more pages than Sam?

Carrie

Brian

Sara

Tori





0204

TIME

Tickets Sold to School Fair

	Max	Kayla	Connor
Morning	10	24	8
Afternoon	15	13	25

Who sold the most tickets in the morning?

Connor

24

Max

Kayla



0212

TIME



Who sold the fewest tickets in the afternoon?

Tickets Sold to School Fair

	Max	Kayla	Connor
Morning	10	24	8
Afternoon	15	13	25



13

Max

Connor



Kayla



Judith

0220

TIME

Tickets Sold to School Fair

	Max	Kayla	Connor
Morning	10	24	8
Afternoon	15	13	25

Connor sold more tickets:

on Tuesday

in the morning

than Kayla

in the afternoon



How Some Sounds of Speech Are Made

What part of the mouth is used to make the /d/ sound at the beginning of the word "dog"?

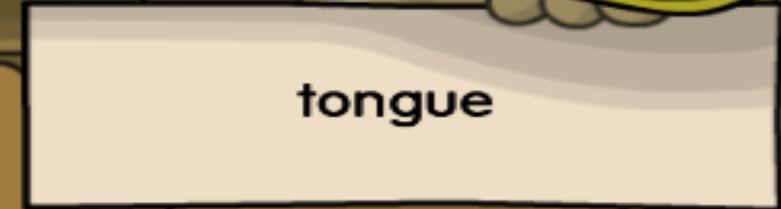
	lips	tongue
"popper"	p,b	t,d
"hisser"	f	s

lips

tongue

woof

hisser





0252

TIME

How Some Sounds of Speech Are Made

"popper"

lips

p,b

tongue

t,d

"hisser"

f

s

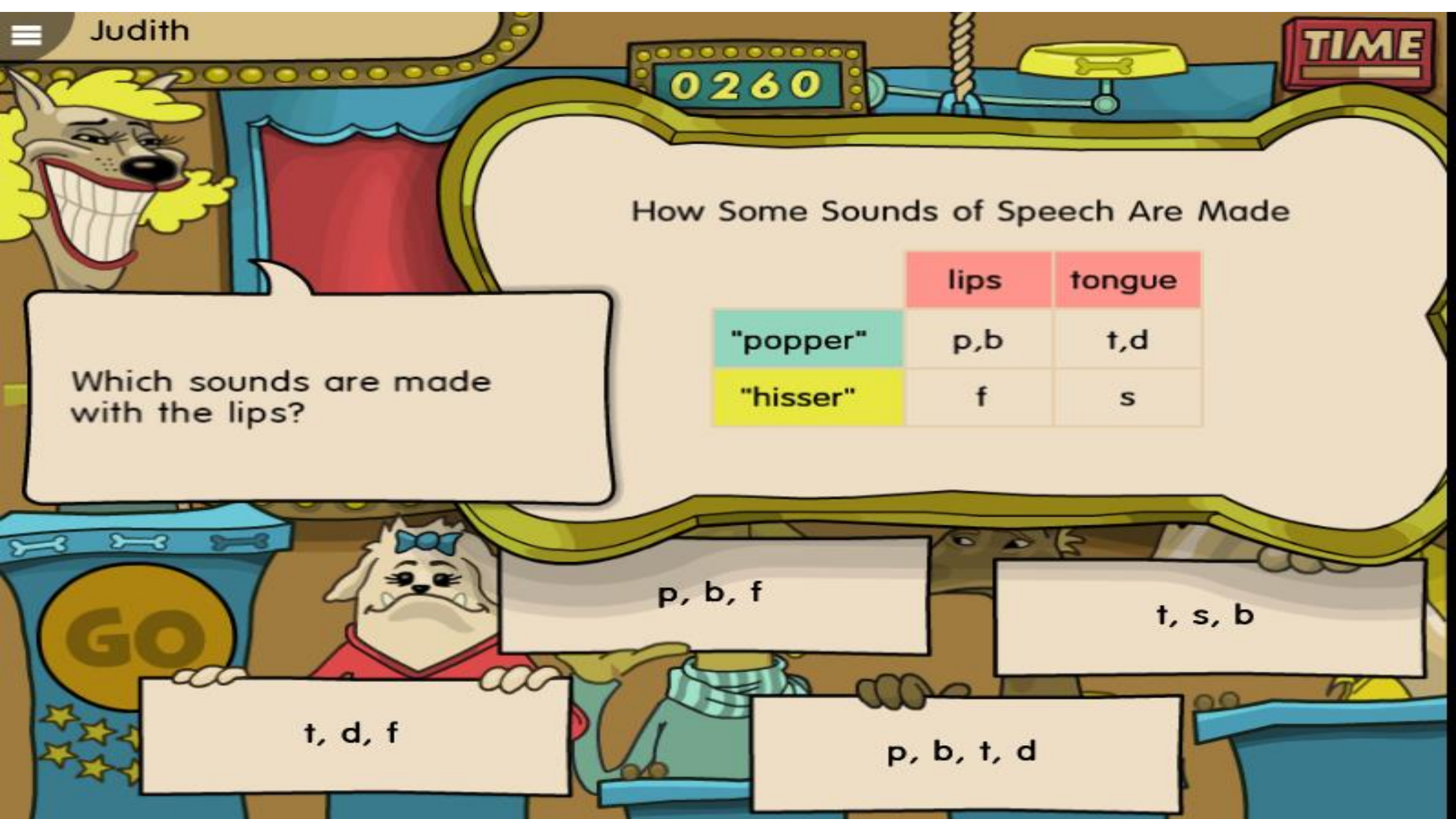
Which of these sounds is a hisser?

t

f

b

d



Judith

0260

TIME

How Some Sounds of Speech Are Made

Which sounds are made with the lips?

lips

tongue

"popper"

p,b

t,d

"hisser"

f

s

p, b, f

t, s, b

t, d, f

p, b, t, d



How Some Sounds of Speech Are Made

	lips	tongue
"popper"	p,b	t,d
"hisser"	f	s

What kind of sound does the [s] at the end of the word "bus" make?



driver

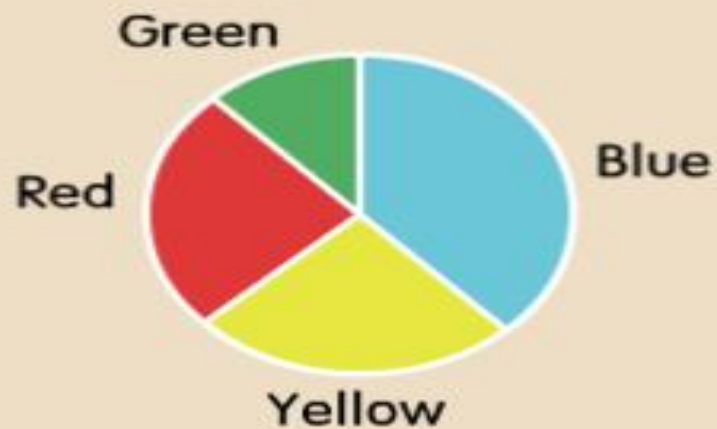
popper

lips

hisser

0276

Favorite Colors in Ms. Garcia's Class



More chose red than:

green

red

purple

blue



0284

TIME

Favorite Colors in Ms. Garcia's Class



The color chosen by the most students was:

green

blue

yellow

pink



The color chosen by the fewest students was:

Favorite Colors in Ms. Garcia's Class



yellow

blue

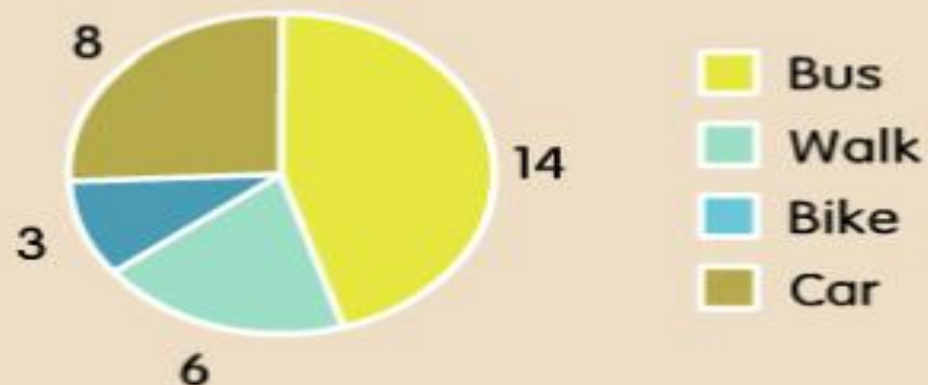
red

green



0316

How Students Come to School
(Number of Students)



How many walk?

6

3

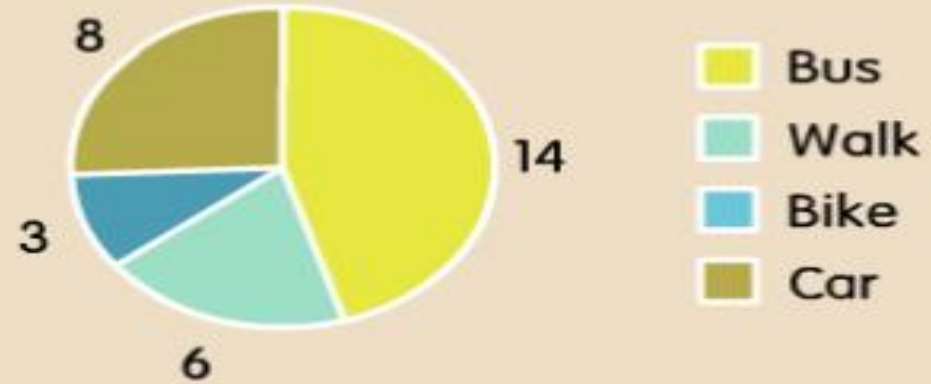
8

14



0324

How Students Come to School
(Number of Students)



What is the most common way students get to school?

bus

car

walk

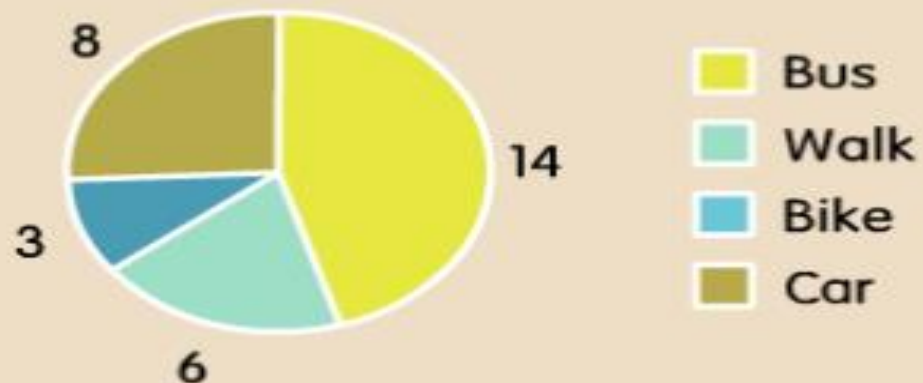
bike



0332

TIME

How Students Come to School (Number of Students)



How many ride a bike?

3

6

8

14



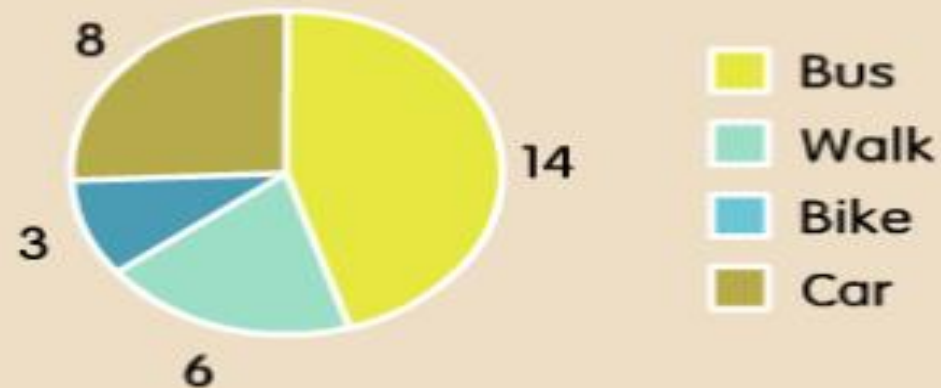
0340

TIME



Which statement is true?

How Students Come to School
(Number of Students)



Most walk.

Less take a bus than walk.

More walk than ride a bike.

Most ride in a car.





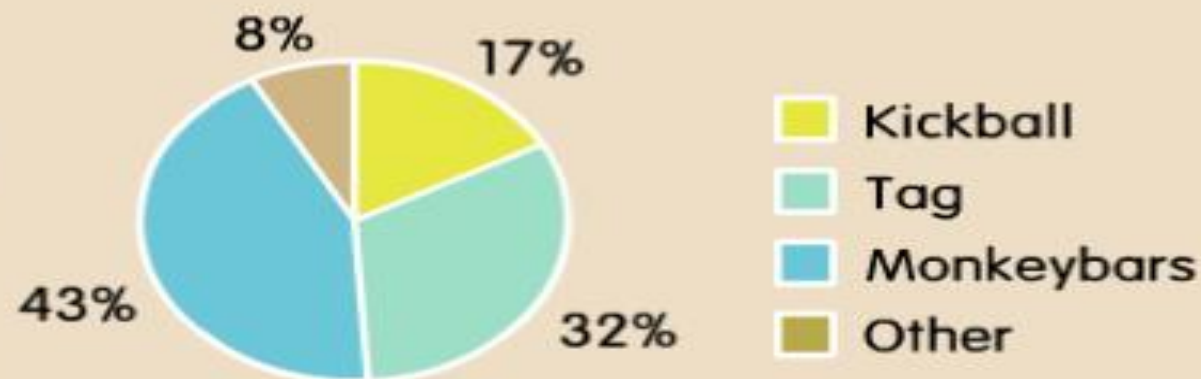
0348

TIME



The most students chose:

Favorite Recess Activity

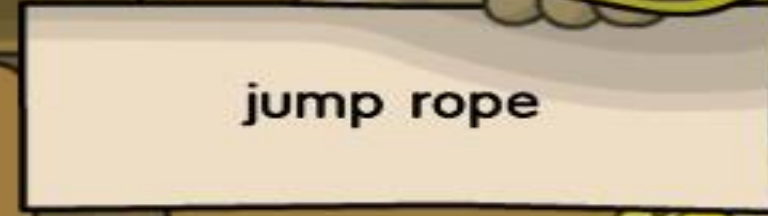



43%

jump rope

monkeybars

kickball

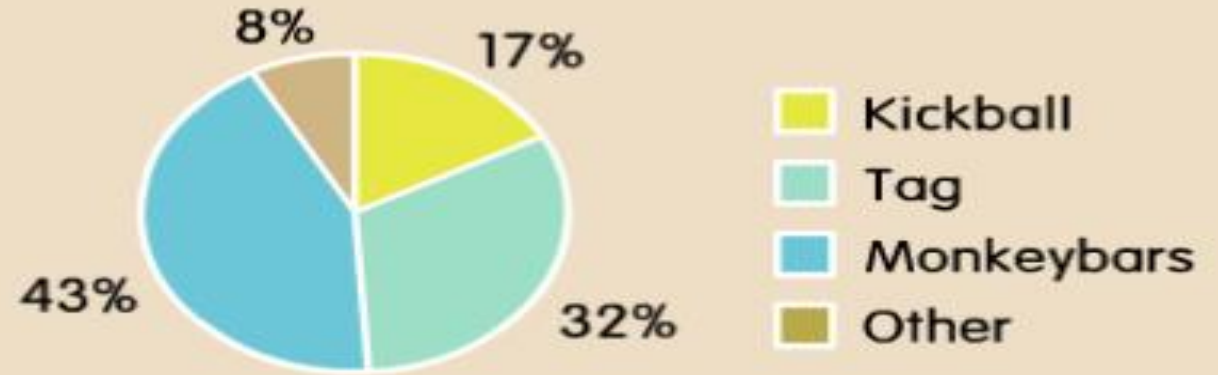




0349

TIME

Favorite Recess Activity



What percentage chose kickball?

17%

43%

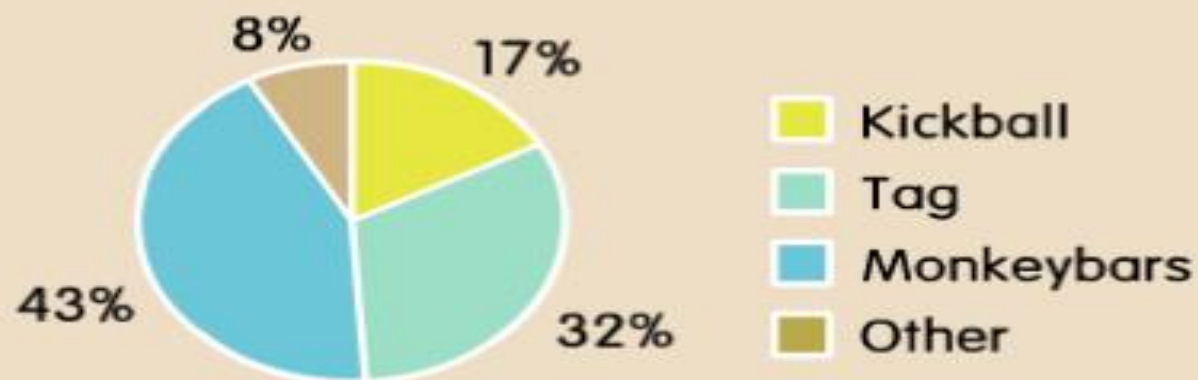
32%

8%

GO

0350

Favorite Recess Activity



Which statement is true?

More chose tag than kickball.

Most chose tag.

No one likes kickball.

Most chose kickball.

0351

High Temperatures This Week



According to the graph,
Friday was warmer than:

Tuesday

It rained.

Wednesday

Monday



Judith

TIME

0359

High Temperatures This Week



What day was the high temperature 75 degrees?

Wednesday

Thursday

Monday

Tuesday



0367

TIME

High Temperatures This Week



How many days was the high temperature 65 degrees?

2

5

0

1



0391

TIME



When was the high temperature 60 degrees?

High Temperatures This Week



Monday

Tuesday

Wednesday and Thursday

Thursday and Friday